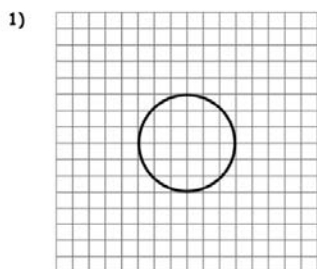


Name _____

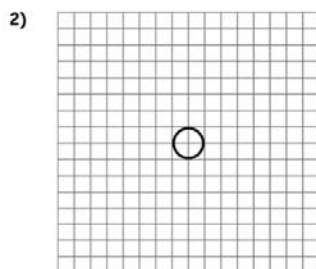
Radius & Diameter

Find the radius or diameter of each circle.



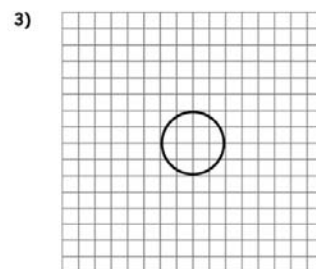
Radius = 3 units

Diameter = 6 units



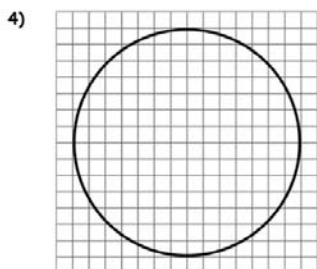
Radius = 1 unit

Diameter = 2 units



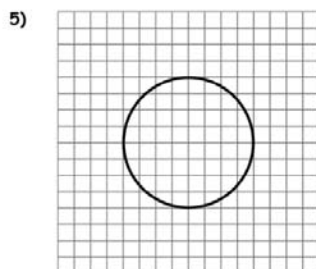
Radius = 2 units

Diameter = 4 units



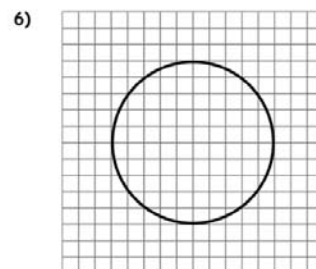
Radius = 7 units

Diameter = 14 units



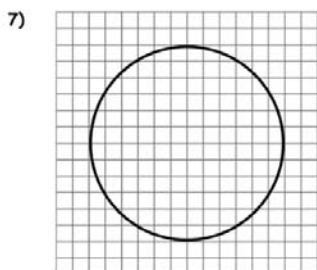
Radius = 4 units

Diameter = 8 units



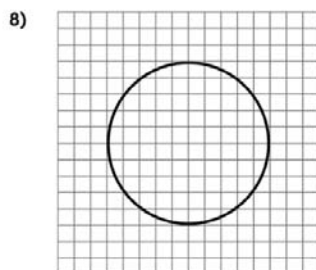
Radius = 5 units

Diameter = 10 units



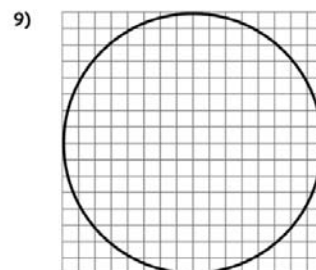
Radius = 6 units

Diameter = 12 units



Radius = 5 units

Diameter = 10 units



Radius = 8 units

Diameter = 16 units