

Name :

Class :

Perpendicular and Intersecting Lines



Perpendicular lines are two lines that intersect at a right angle (90°). Intersecting lines are two lines that cross each other at any angle



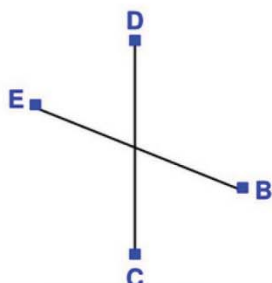
Intersection lines



Perpendicular lines

Identify the which pair of lines are perpendicular, intersecting or none.

1)



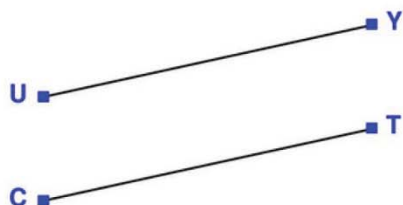
Answer: Intersecting

4)



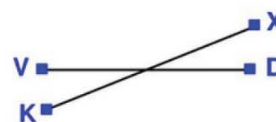
Answer: None

2)



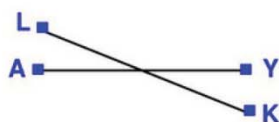
Answer: None

5)



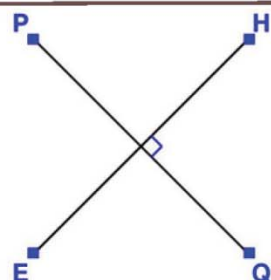
Answer: Intersecting

3)



Answer: Intersecting

6)



Answer: Perpendicular