

Name :

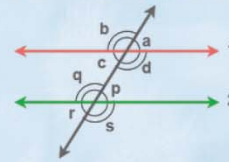
Class :

# Parallel lines and Transversals



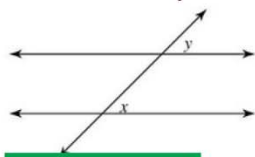
Parallel lines are lines in the same plane that go in the same direction and never intersect. When a third line, called a transversal

Parallel Lines and Transversal



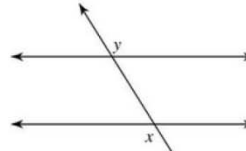
Identify each pair of angles as corresponding, alternate interior, alternate exterior, or consecutive interior

1)



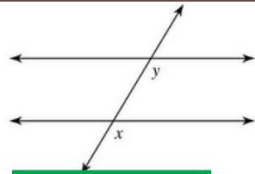
corresponding

2)



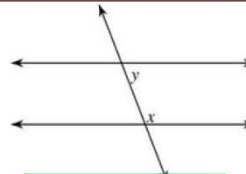
alternate exterior

3)



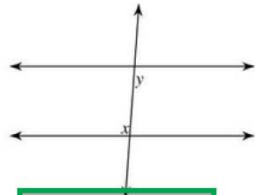
corresponding

4)



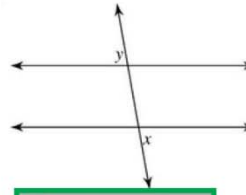
consecutive interior

5)



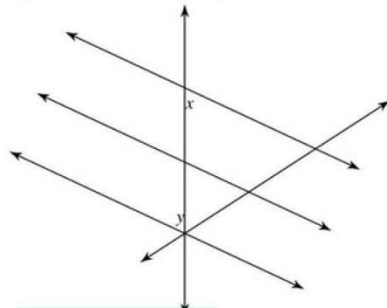
alternate interior

6)



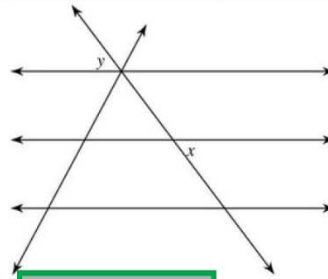
alternate exterior

7)



alternate interior

8)



alternate exterior