

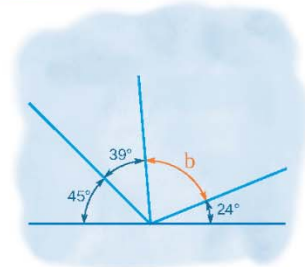
Name :

Class :

## Angles on a Straight Line

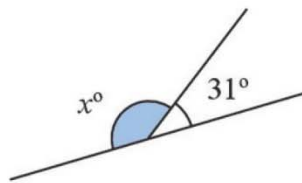


Angles on a straight line relate to the sum of angles that can be arranged together so that they form a straight line

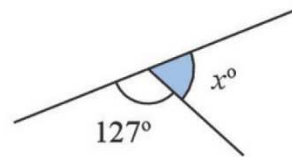


Find the value of  $x$  in each problem.

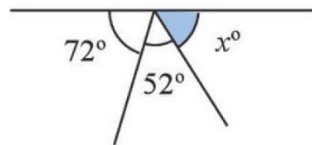
1) Find the value  $x$



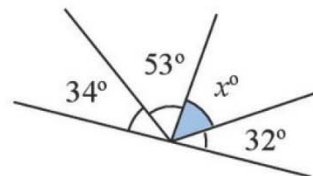
2) Find the value  $x$



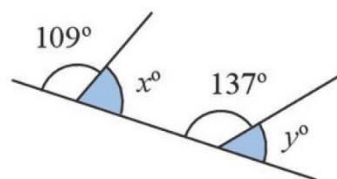
3) Find the value  $x$



4) Find the value  $x$



5) Find the values of  $x$  and  $y$



6) Find the values of  $x$  and  $y$

