

Name _____

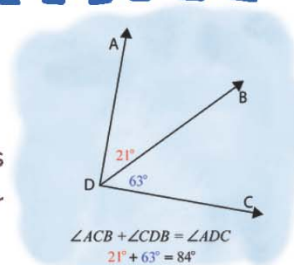
Name :

Class :



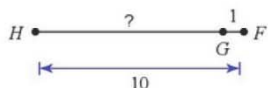
Angle Postulate

The sum of two adjacent angle measures will be equal to the measure of the larger angle they form.

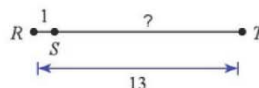


Find the length indicated

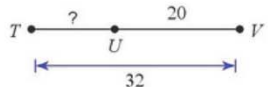
1)



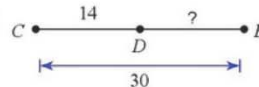
2)



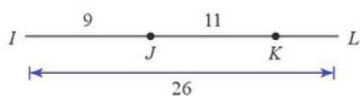
3)



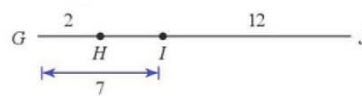
4)



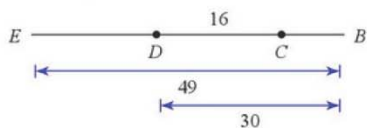
5) Find KL



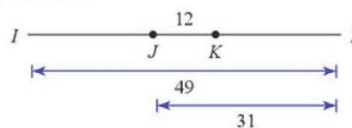
6) Find HJ



7) Find EC



8) Find JK



Points A, B, and C are collinear. Point B is between A and C. Find the length indicated

9)

Find AC if $AB = 16$ and $BC = 12$.

10)

Find AC if $AB = 13$ and $BC = 9$.