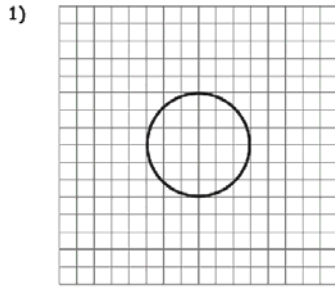


Name _____

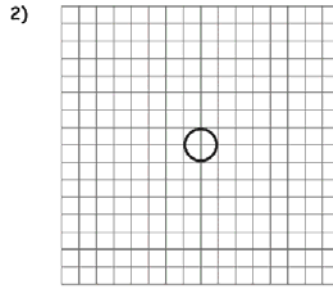
Radius & Diameter

Find the radius or diameter of each circle.



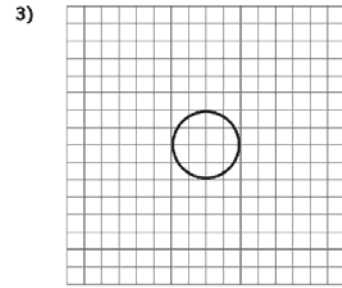
Radius = _____

Diameter = _____



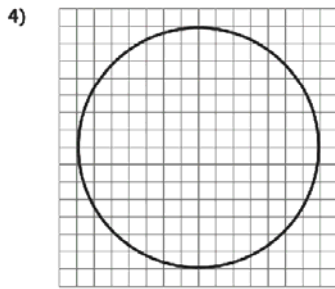
Radius = _____

Diameter = _____



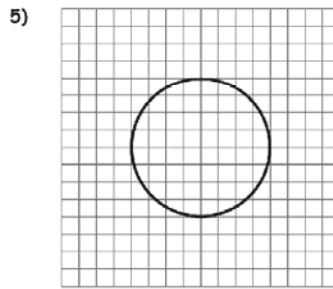
Radius = _____

Diameter = _____



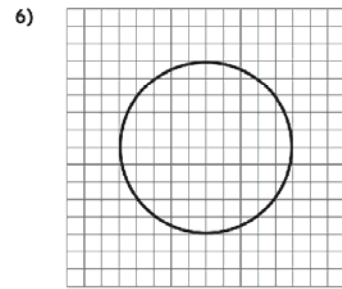
Radius = _____

Diameter = _____



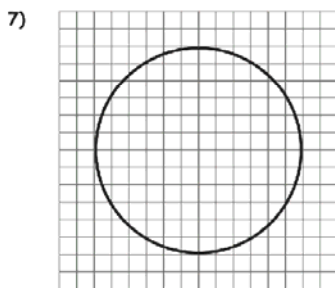
Radius = _____

Diameter = _____



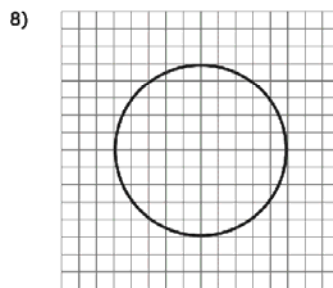
Radius = _____

Diameter = _____



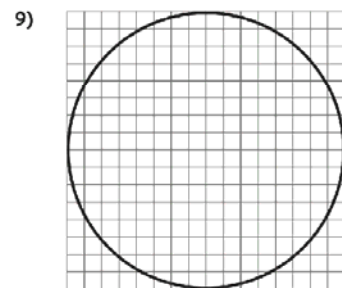
Radius = _____

Diameter = _____



Radius = _____

Diameter = _____



Radius = _____

Diameter = _____