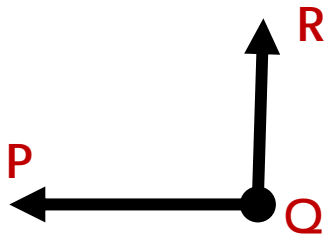


Name \_\_\_\_\_

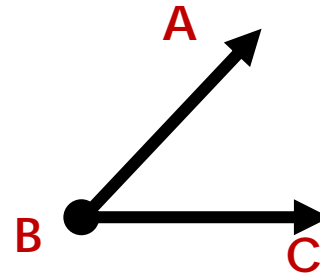
## Drawing Angles Answer Key

Draw angles with the given vertices and arms.

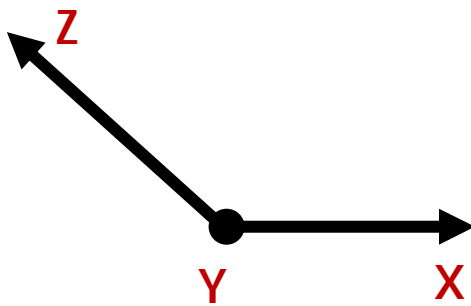
Vertex: Q and Arms:  $\overrightarrow{QR}$ ,  $\overrightarrow{QP}$



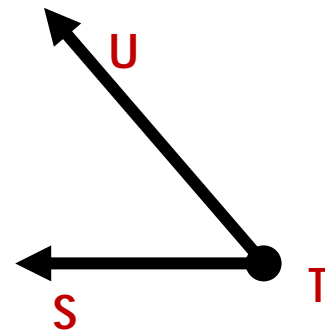
Vertex: B and Arms:  $\overrightarrow{BA}$ ,  $\overrightarrow{BC}$



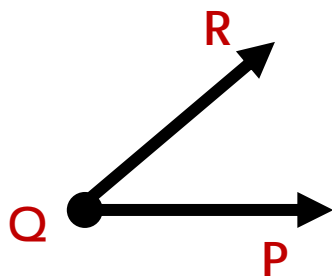
Vertex: Y and Arms:  $\overrightarrow{YZ}$ ,  $\overrightarrow{YX}$



Vertex: T and Arms:  $\overrightarrow{TU}$ ,  $\overrightarrow{TS}$



Vertex: Q and Arms:  $\overrightarrow{QR}$ ,  $\overrightarrow{QP}$



Vertex: U and Arms:  $\overrightarrow{UT}$ ,  $\overrightarrow{UV}$

