

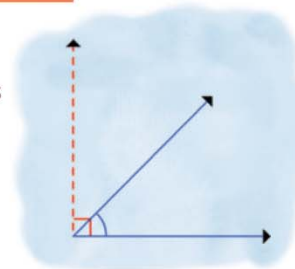
Name :

Class :

Estimating Angle

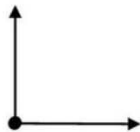


Estimating an angle means trying to guess at the measurement of the angle.



Find estimating of the size of the angles shown.

1)



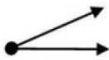
90°

2)



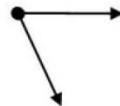
180°

3)



30°

4)



80°

5)



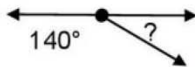
5°

6)



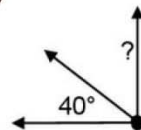
135°

7)



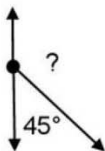
40°

8)



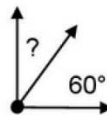
50°

9)



135°

10)



30°