

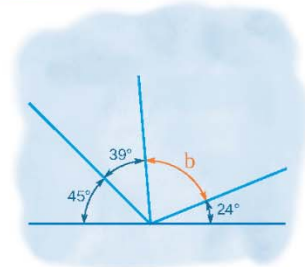
Name :

Class :

Angles on a Straight Line



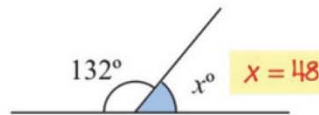
Angles on a straight line relate to the sum of angles that can be arranged together so that they form a straight line



Find the value of x in each problem.

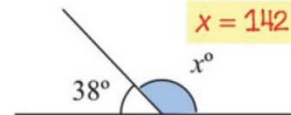
1)

Find the value x



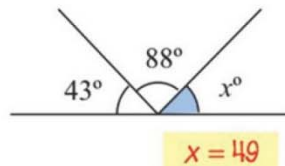
2)

Find the value x



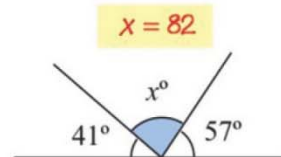
3)

Find the value x



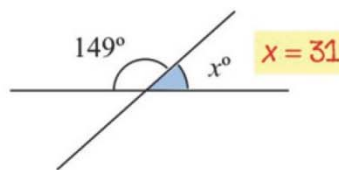
4)

Find the value x



5)

Find the value x



6)

Find the value x

