

Name _____

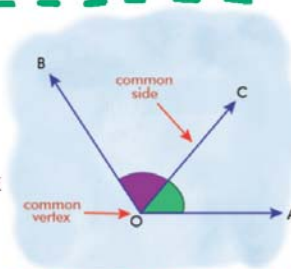
Name :

Class :



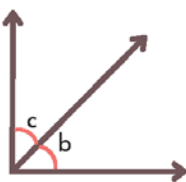
Adjacent Angles

A pair of angles that share a common vertex and a common arm (but do not overlap).



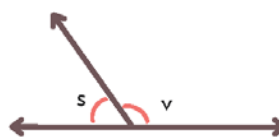
State whether the indicated angle pairs are adjacent or not

1)



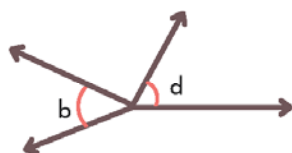
Adjacent

2)



Adjacent

3)



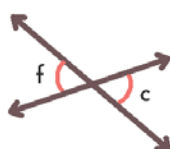
Not adjacent

4)



Adjacent

5)



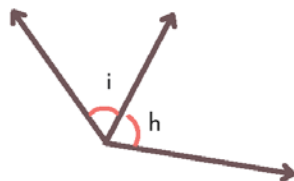
Not adjacent

6)



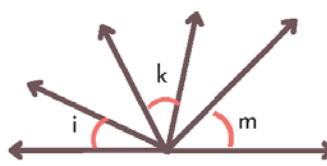
Not adjacent

7)



Adjacent

8)



Not adjacent