

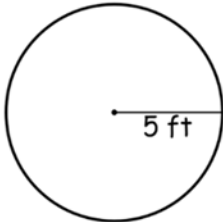
Name _____

Circle - Circumference

Find the circumference of each circle.

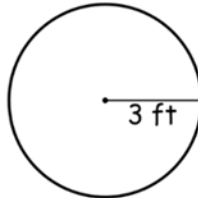
Round your answer to the nearest tenth. (use $\pi = 3.14$)

1)



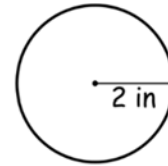
Circumference = **31.4 ft**

2)



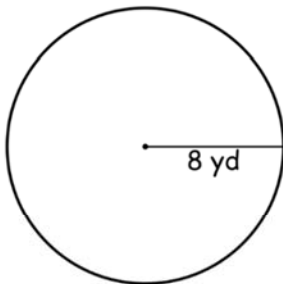
Circumference = **18.8 ft**

3)



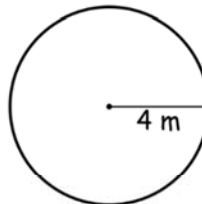
Circumference = **12.6 in**

4)



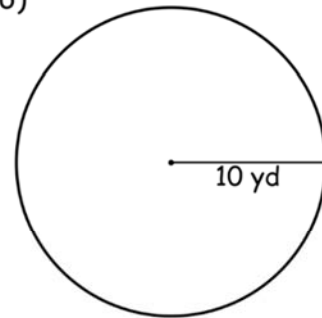
Circumference = **50.2 yd**

5)



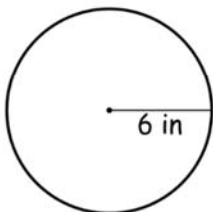
Circumference = **25.1 m**

6)



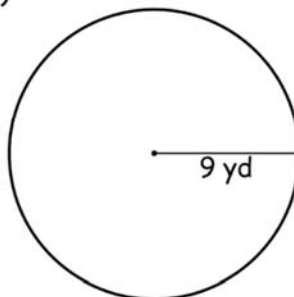
Circumference = **62.8 yd**

7)



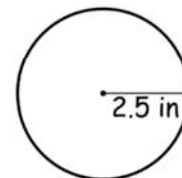
Circumference = **37.7 in**

8)



Circumference = **56.5 yd**

9)



Circumference = **15.7 in**