

Name :

Class :

# Perpendicular and Intersecting Lines



Perpendicular lines are two lines that intersect at a right angle ( $90^\circ$ ). Intersecting lines are two lines that cross each other at any angle




Intersection lines



Perpendicular lines

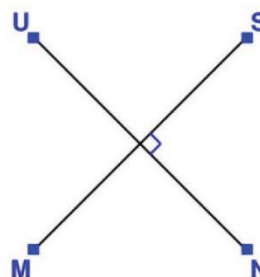
Identify the which pair of lines are perpendicular, intersecting or none.

1)



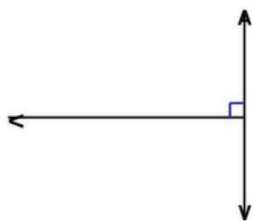
Answer: \_\_\_\_\_

4)



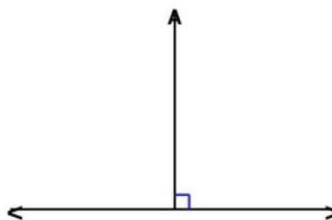
Answer: \_\_\_\_\_

2)



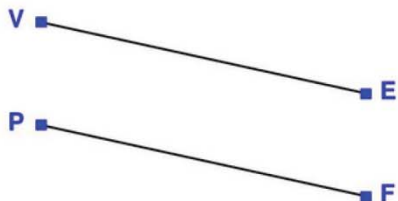
Answer: \_\_\_\_\_

5)



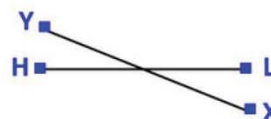
Answer: \_\_\_\_\_

3)



Answer: \_\_\_\_\_

6)



Answer: \_\_\_\_\_