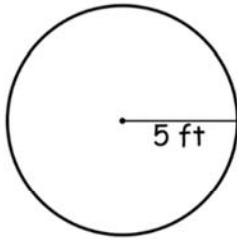


Name _____

Circle-Circumference

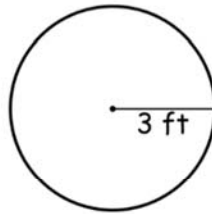
Find the circumference of each circle.
Round your answer to the nearest tenth. (use $\pi = 3.14$)

1)



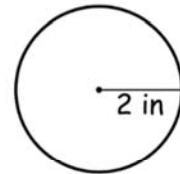
Circumference =

2)



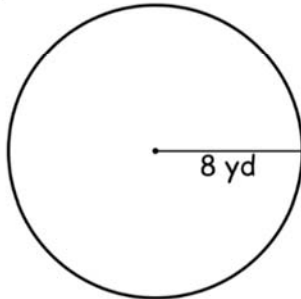
Circumference =

3)



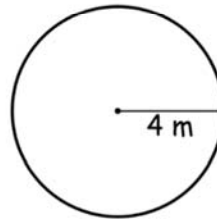
Circumference =

4)



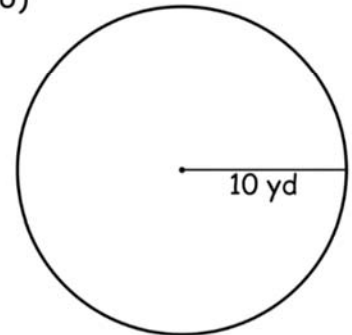
Circumference =

5)



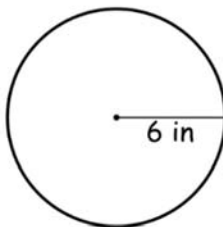
Circumference =

6)



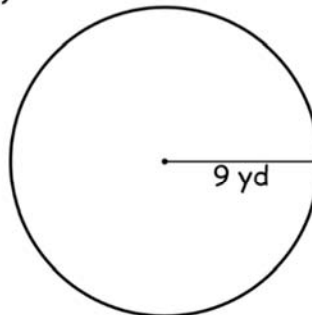
Circumference =

7)



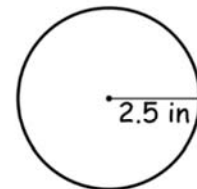
Circumference =

8)



Circumference =

9)



Circumference =