

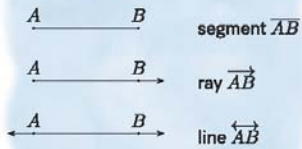
Name :

Class :

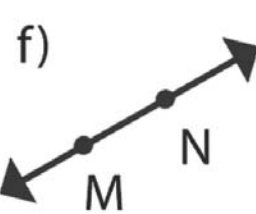
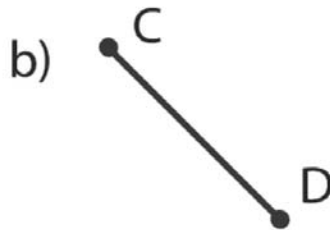
## Line, Rays and Line Segments



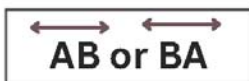
A line is a straight path on a plane that extends forever in both directions with no endpoints. A line segment is part of a line that has two endpoints and is finite in length. A ray is a line segment that extends indefinitely in one direction.



Write if each is a point, line, rays and line segments



Line



Ray



Line segment

