

Name: _____

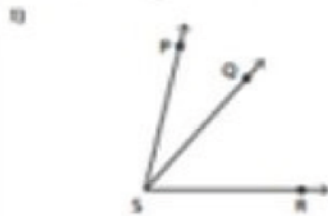
Class: _____



NAMING THE ANGLE!

Names the angles with common vertex
Identify the angles below as acute,
obtuse, right, or straight.

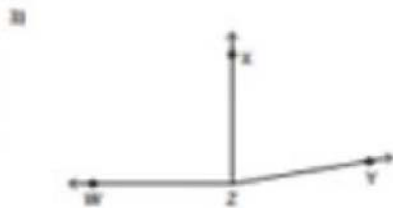
Names the angles with common vertex



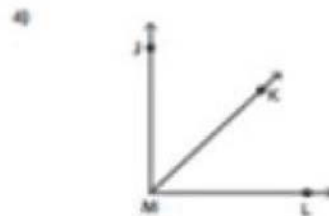
Obtuse



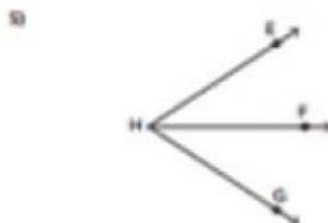
Acute



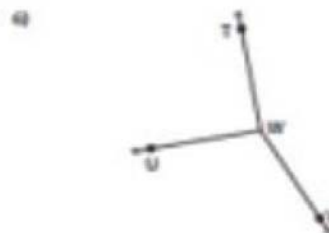
Obtuse



Right



Acute



Right