

Name :

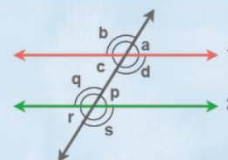
Class :

Parallel lines and Transversals



Parallel lines are lines in the same plane that go in the same direction and never intersect. When a third line, called a transversal

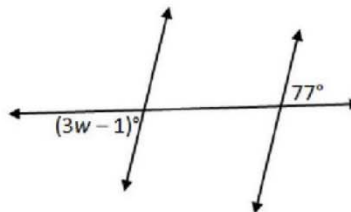
Parallel Lines and Transversal



Write the equation you can use to find the value of the variable. Then find the value of the variable.

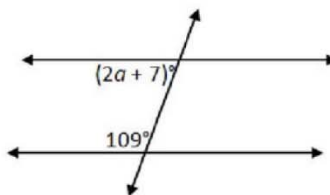
Equation _____

$w =$ _____



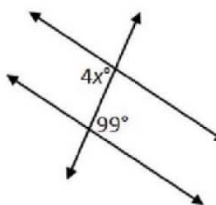
Equation _____

$a =$ _____



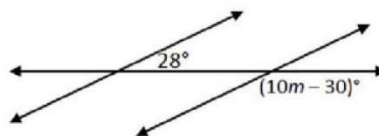
Equation _____

$x =$ _____



Equation _____

$m =$ _____



Equation _____

$t =$ _____

