

Name :

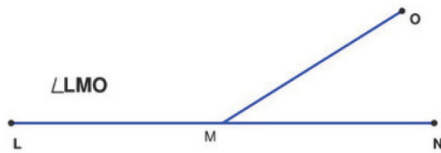
Class :



Measuring Angles

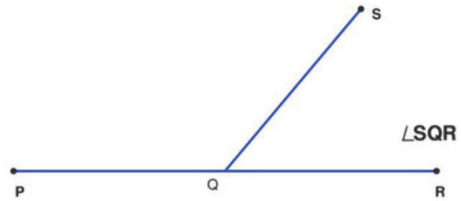
Measure the Angle to the Nearest Degree

1)



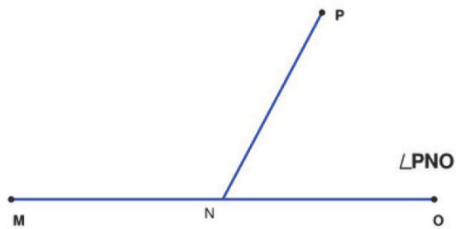
Angle LMO = _____

2)



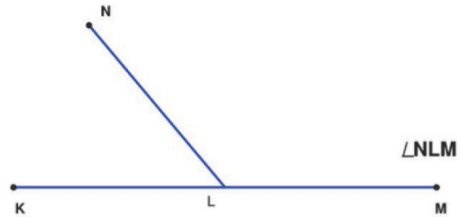
Angle SQR = _____

3)



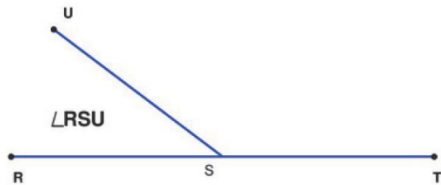
Angle PNO = _____

4)



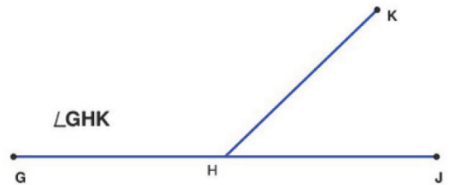
Angle NLM = _____

5)



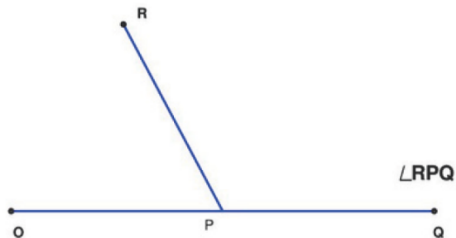
Angle RSU = _____

6)



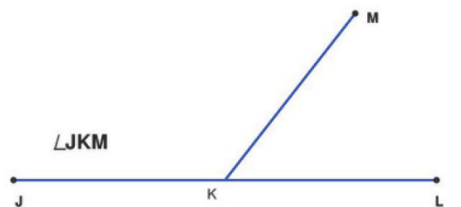
Angle GHK = _____

7)



Angle RPQ = _____

8)



Angle JKM = _____