

Name :

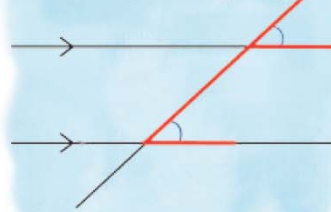
Class :



CORRESPONDING ANGLES

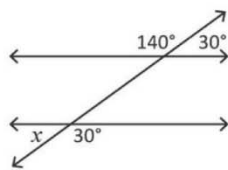
The angles which are formed at corresponding corners when two parallel lines are intersected by a transversal.

Corresponding angles

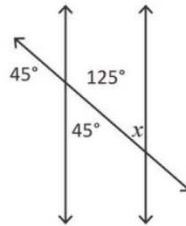


Find the value of x in each figure below where two parallel lines are cut by a transversal.

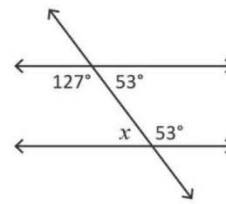
1)



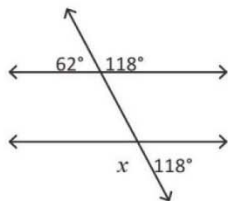
2)



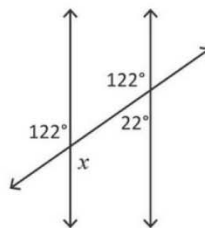
3)



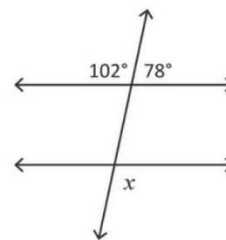
4)



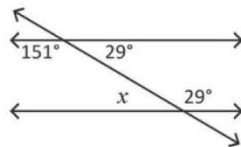
5)



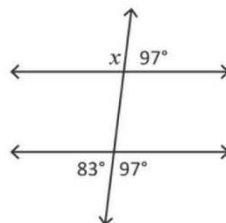
6)



7)



8)



9)

