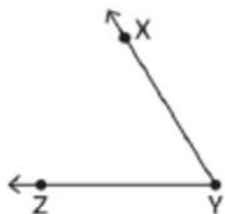


Name _____

Naming the Vertex and Angles Answer Key

Name the vertex and arms in each figure below.



Vertex: Y

Arm: YZ, YX



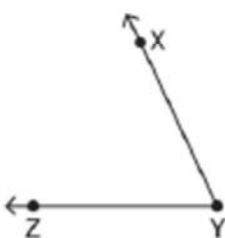
Vertex: B

Arm: BA, BC



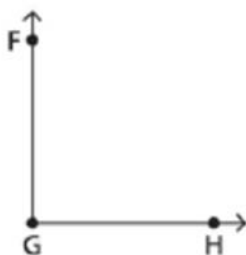
Vertex: K

Arm: KJ, KL



Vertex: Y

Arm: YZ, YX



Vertex: G

Arm: GF, GH



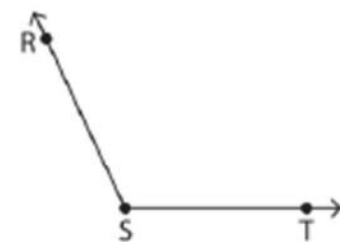
Vertex: K

Arm: KJ, KL



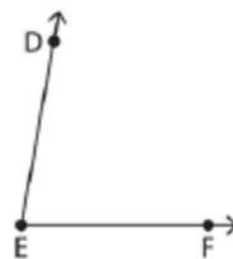
Vertex: L

Arm: LM, LK



Vertex: S

Arm: SR, ST



Vertex: E

Arm: ED, EF