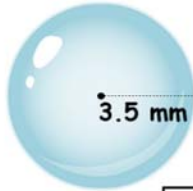


Name _____

Circle - Circumference

Find the circumference of each bubble. (Use $\pi = \frac{22}{7}$)




Circumference = **22 mm**



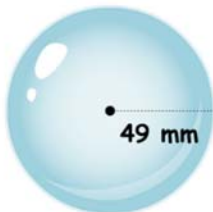
Circumference = **6.6 mm**



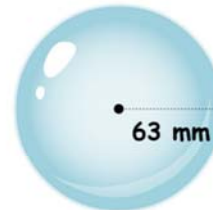
Circumference = **4.4 mm**




Circumference = **11 m**




Circumference = **308 mm**



Circumference = **396 mm**



Circumference = **132 mm**



Circumference = **110 mm**

