

Name :

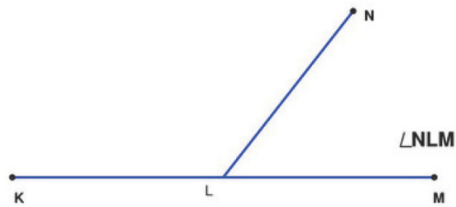
Class :



Measuring Angles

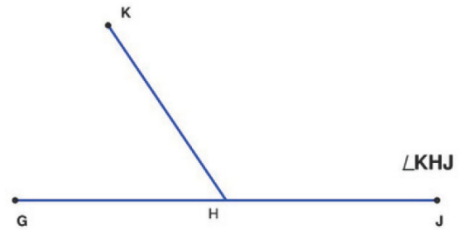
Measure the Angle to the Nearest Degree

1)



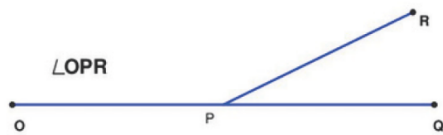
Angle NLM = _____

2)



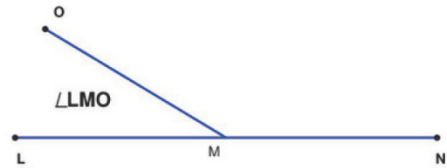
Angle KHJ = _____

3)



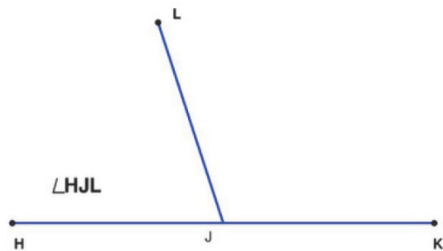
Angle OPR = _____

4)



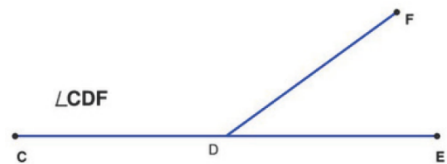
Angle LMO = _____

5)



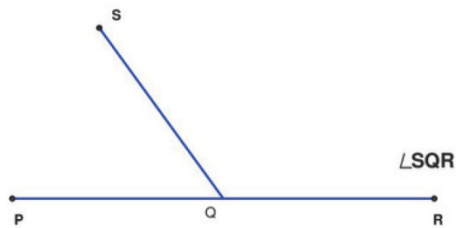
Angle HJL = _____

6)



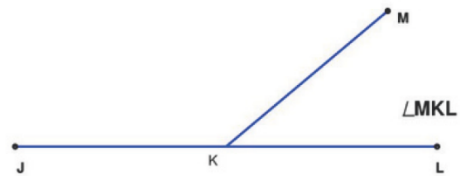
Angle CDF = _____

7)



Angle SQR = _____

8)



Angle MKL = _____