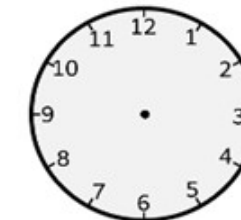
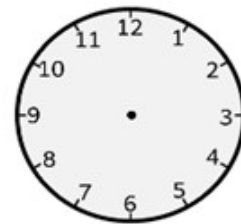
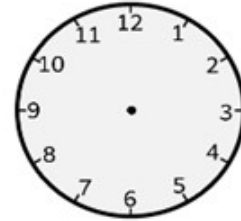
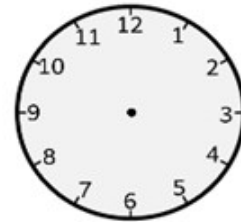


Name _____

NAME: _____

WORKSHEET 14 - ANALOG AND DIGITAL CLOCKS

Draw the hands of the clock according to the time indicated below.



How Did You Do? 😊 😐 ☹️