

Name :

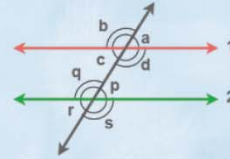
Class :

# Parallel lines and Transversals



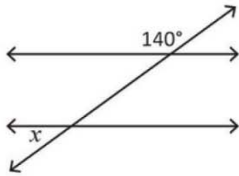
Parallel lines are lines in the same plane that go in the same direction and never intersect. When a third line, called a transversal

Parallel Lines and Transversal

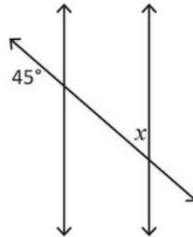


Find the value of angle  $x$

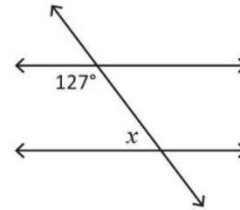
1)



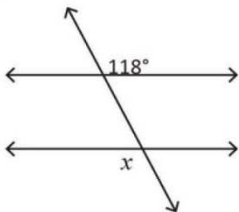
2)



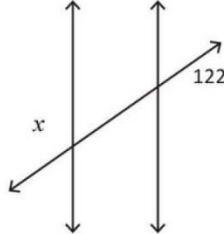
3)



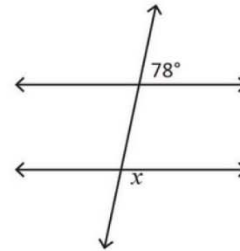
4)



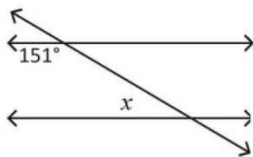
5)



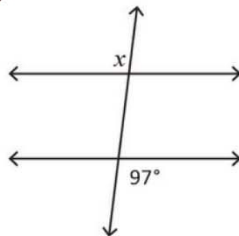
6)



7)



8)



9)

