










NAME: _____

HOW MANY SIDES?

Count the sides on each shape and dab or color the matching numeral.

 (5) (2) (3)	 (2) (3) (4)	 (0) (2) (3)
 (0) (4) (3)	 (5) (3) (4)	 (7) (5) (3)
 (4) (2) (3)	 (6) (3) (4)	 (5) (2) (4)

How Did You Do? 😊 😐 😞