

Name :

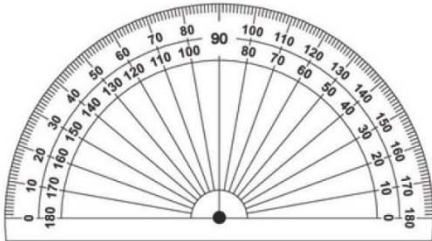
Class :



# Drawing angles

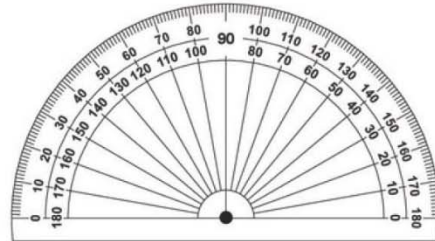
Draw the angle on the 180° protractor-3 and then write then name

a) 72°



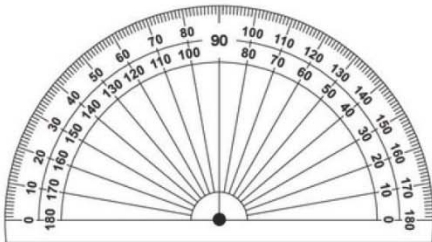
name: \_\_\_\_\_

b) 114°



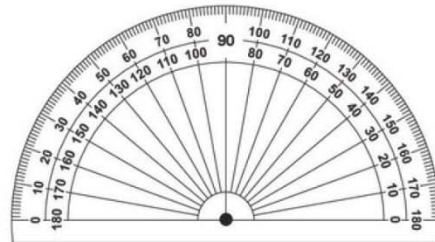
name: \_\_\_\_\_

c) 11°



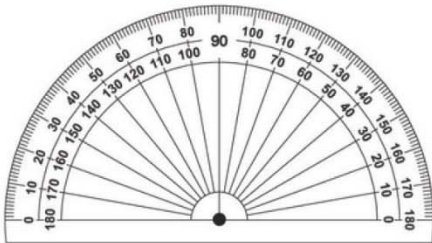
name: \_\_\_\_\_

d) 34°



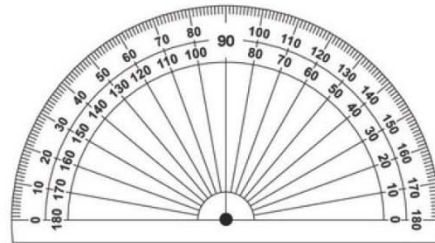
name: \_\_\_\_\_

e) 141°



name: \_\_\_\_\_

f) 3°



name: \_\_\_\_\_