

Name: _____

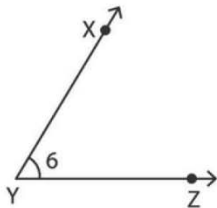
Class: _____



NAMING THE ANGLE!

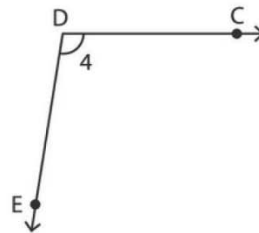
Write the missing representation of each angle

1)



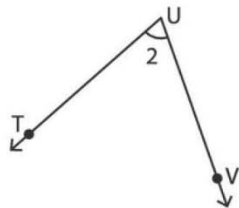
$$\angle XYZ \cong \angle ZYX \cong \angle Y \cong \angle 6$$

2)



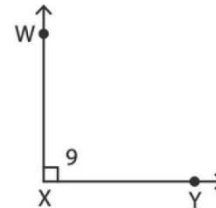
$$\angle CDE \cong \angle D \cong \angle 4 \cong \angle EDC$$

3)



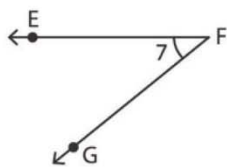
$$\angle 2 \cong \angle TUV \cong \angle UVT \cong \angle U$$

4)



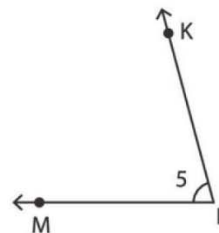
$$\angle X \cong \angle WXY \cong \angle YXW \cong \angle 9$$

5)



$$\angle EFG \cong \angle GEF \cong \angle 7 \cong \angle F$$

6)



$$\angle L \cong \angle KLM \cong \angle MLK \cong \angle 5$$