

Name :

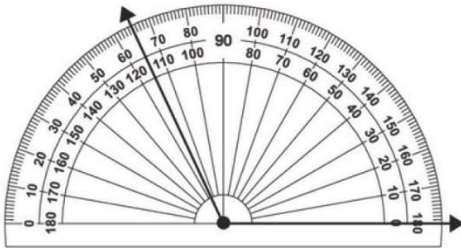
Class :



Drawing angles

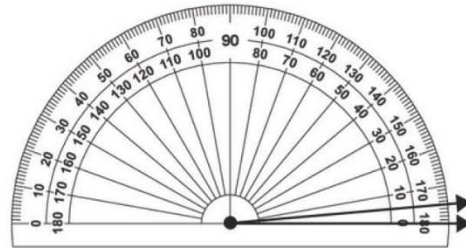
Draw the angle on the 180° protractor-2 and then write then name

a) 115°



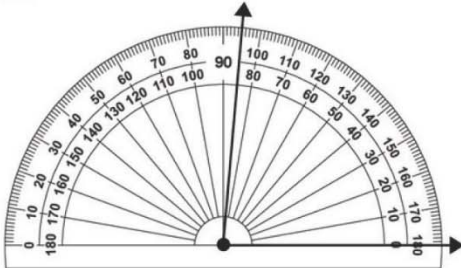
name: obtuse angle

b) 5°



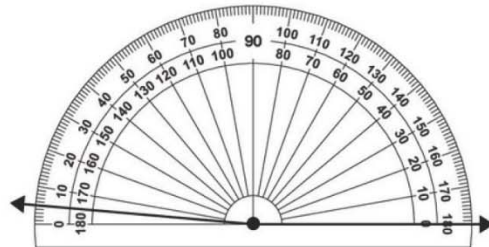
name: acute angle

c) 85°



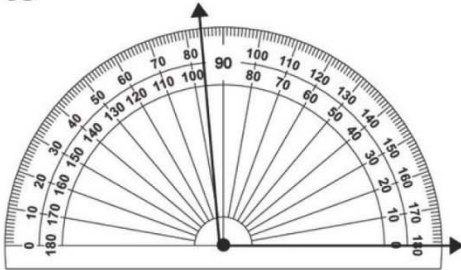
name: acute angle

d) 175°



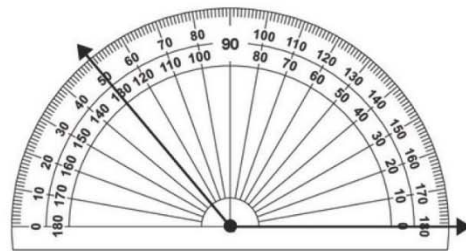
name: obtuse angle

e) 95°



name: obtuse angle

f) 130°



name: obtuse angle