







Name _____

Line, Rays and Line Segments

Identify the figure as a line, ray or line segment.

1)				
(i) Line AB	<input checked="" type="checkbox"/> (ii) Ray AB	(iii) Line segment AB	(iv) None of these	
2)				
<input checked="" type="checkbox"/> (i) Line XY	(ii) Ray XY	(iii) Line segment XY	(iv) None of these	
3)				
(i) Line BC	(ii) Ray BC	(iii) Line segment BC	<input checked="" type="checkbox"/> (iv) None of these	
4)				
(i) Line ST	(ii) Ray ST	<input checked="" type="checkbox"/> (iii) Line segment ST	(iv) None of these	
5)				
<input checked="" type="checkbox"/> (i) Ray BA	(ii) Ray AB	(iii) Line segment AB	(iv) None of these	
6)				
(i) Line YZ	(ii) Ray YZ	(iii) Line segment YZ	<input checked="" type="checkbox"/> (iv) None of these	