

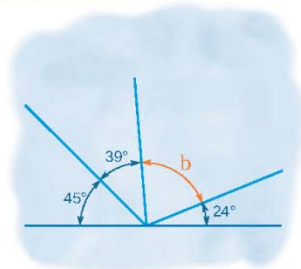
Name :

Class :

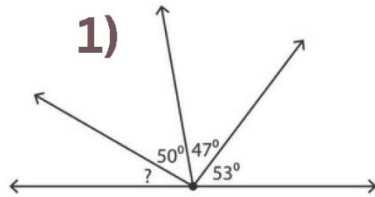
## Angles on a Straight Line



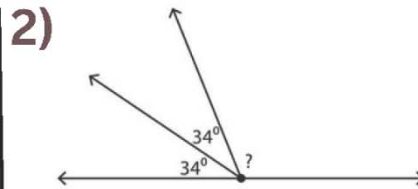
Angles on a straight line relate to the sum of angles that can be arranged together so that they form a straight line



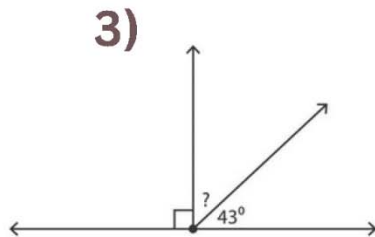
Find the measure of the unknown angle in each figure.



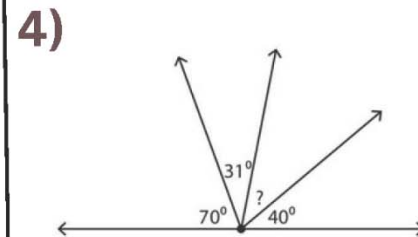
\_\_\_\_\_



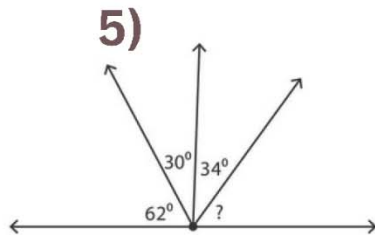
\_\_\_\_\_



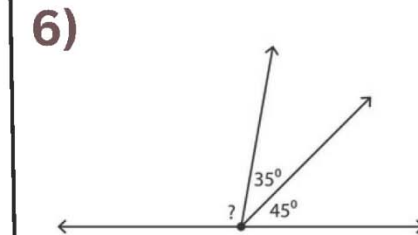
\_\_\_\_\_



\_\_\_\_\_



\_\_\_\_\_



\_\_\_\_\_