

Name :

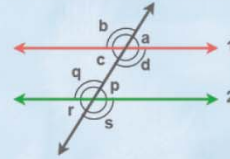
Class :

# Parallel lines and Transversals



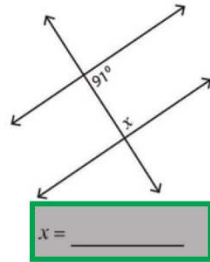
Parallel lines are lines in the same plane that go in the same direction and never intersect. When a third line, called a transversal

Parallel Lines and Transversal

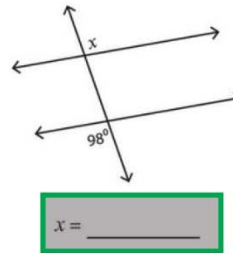


Find the value of each indicated angle.

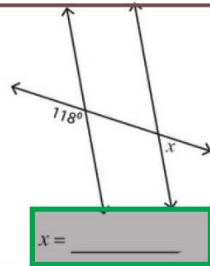
1)



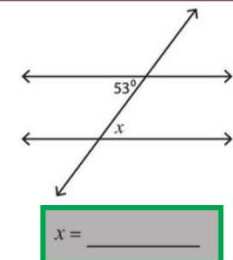
2)



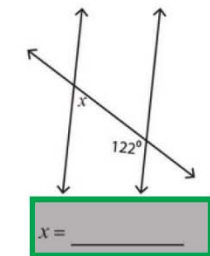
3)



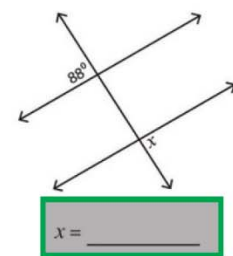
4)



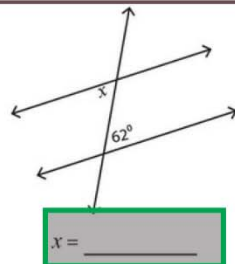
5)



6)



7)



8)

