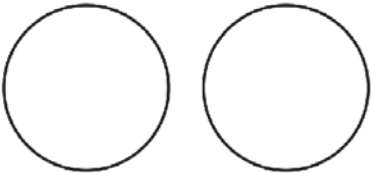
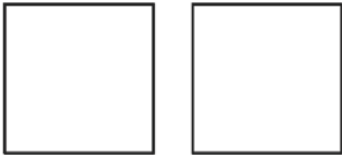
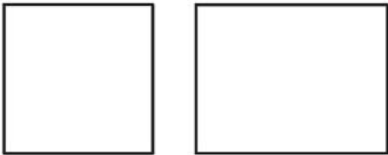
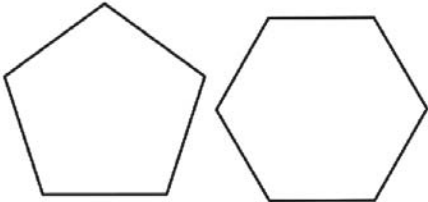
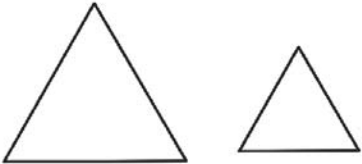
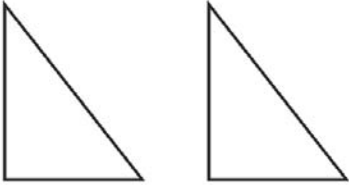


Name _____

Congruent Shapes

In each box, decide if the pair of shapes are congruent.

 <p>Yes <input type="checkbox"/> No <input type="checkbox"/></p>	 <p>Yes <input type="checkbox"/> No <input type="checkbox"/></p>
 <p>Yes <input type="checkbox"/> No <input type="checkbox"/></p>	 <p>Yes <input type="checkbox"/> No <input type="checkbox"/></p>
 <p>Yes <input type="checkbox"/> No <input type="checkbox"/></p>	 <p>Yes <input type="checkbox"/> No <input type="checkbox"/></p>