

Name :

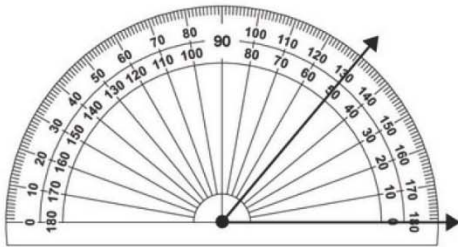
Class :



Drawing angles

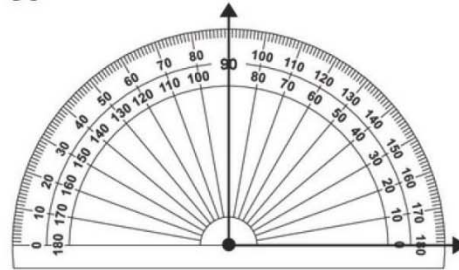
Draw the angle on the 180° protractor and then write then name

a) 50°



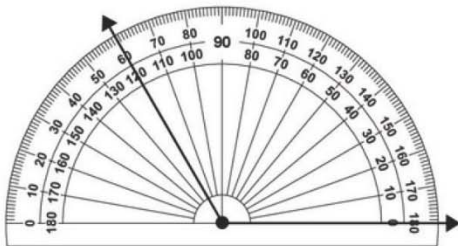
name: acute angle

b) 90°



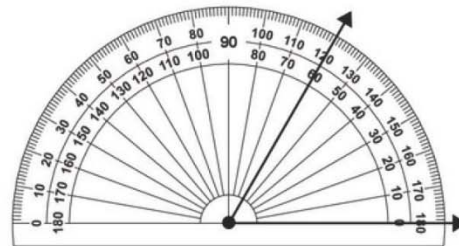
name: right angle

c) 120°



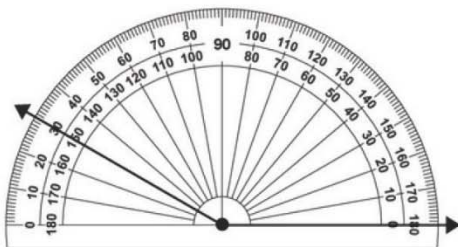
name: obtuse angle

d) 60°



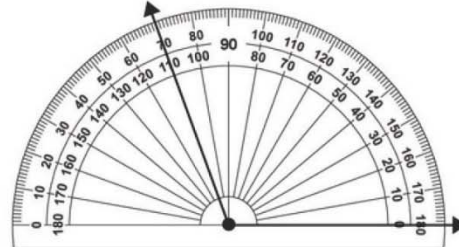
name: acute angle

e) 150°



name: obtuse angle

f) 110°



name: obtuse angle