

Name \_\_\_\_\_

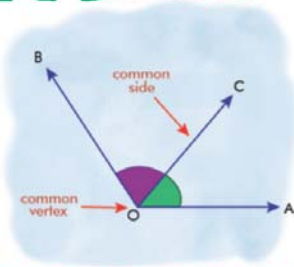
Name :

Class :



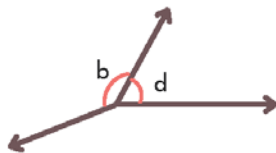
# Adjacent Angles

A pair of angles that share a common vertex and a common arm (but do not overlap).



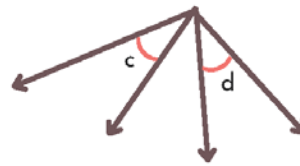
**A** State whether the indicated angle pairs are adjacent or not

1)



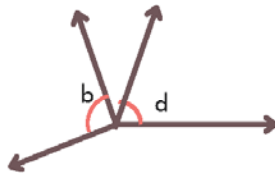
Adjacent

2)



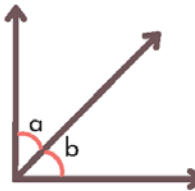
Not adjacent

3)



Not adjacent

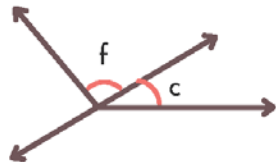
4)



adjacent

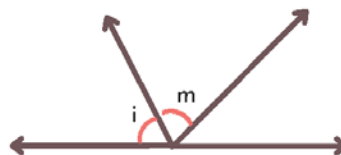
**B** Identify the two pairs of adjacent angles in each figure

1



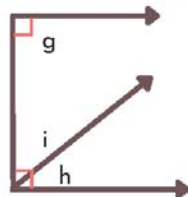
$\angle f$  and  $\angle c$

2



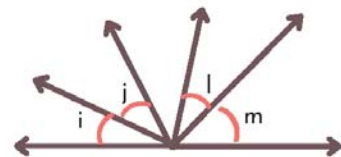
$\angle i$  and  $\angle m$

3



$\angle i$  and  $\angle h$

4



$\angle i$ ,  $\angle j$  and  $\angle l$ ,  $\angle m$