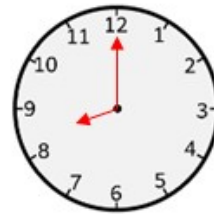
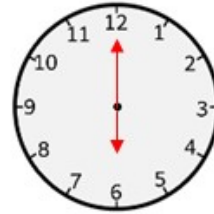
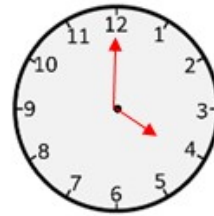
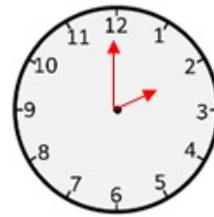


Name \_\_\_\_\_

## ANSWERS

### WORKSHEET 10 - ANALOG AND DIGITAL CLOCKS

Draw the hands of the clock according to the time indicated below.



How Did You Do? 😊 😐 ☹️