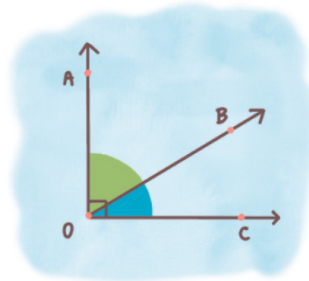


Name :

Class :

## COMPLEMENTARY ANGLES



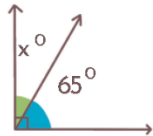
Two angles are called complementary when their sum adds up to 90 degrees.

$$\angle AOB + \angle BOC = 90^\circ$$

### EXERCISE

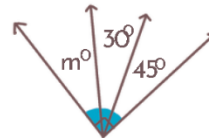
Find the value of the missing angles!

1



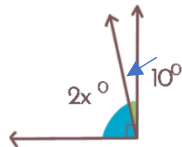
$$x = 25$$

2



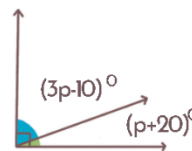
$$m = 15$$

3



$$x = 40$$

4



$$p = 20$$