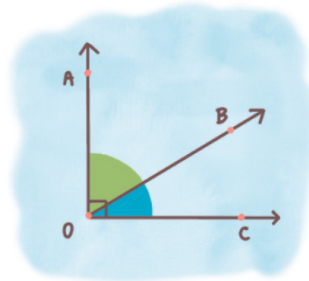


Name :

Class :

COMPLEMENTARY ANGLES



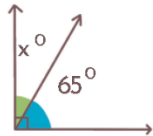
Two angles are called complementary when their sum adds up to 90 degrees.

$$\angle AOB + \angle BOC = 90^\circ$$

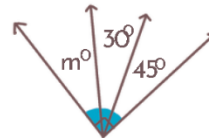
EXERCISE

Find the value of the missing angles!

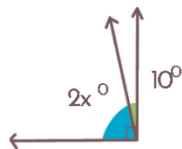
1



2



3



4

