

Name _____

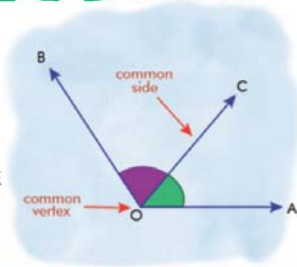
Name :

Class :



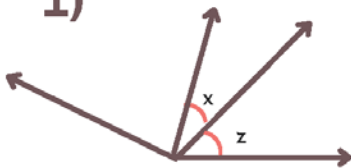
Adjacent Angles

A pair of angles that share a common vertex and a common arm (but do not overlap).

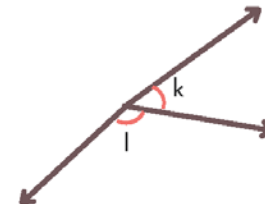


State whether the indicated angle pairs are adjacent or not

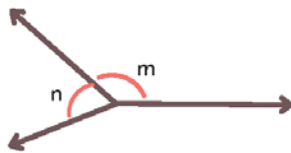
1)



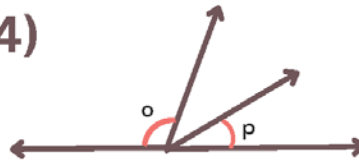
2)



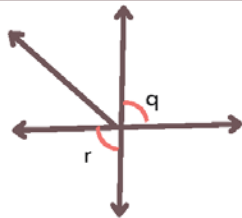
3)



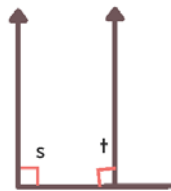
4)



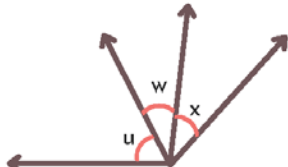
5)



6)



7)



8)

