


Name :

Class :

Perpendicular and Intersecting Lines



Perpendicular lines are two lines that intersect at a right angle (90°). Intersecting lines are two lines that cross each other at any angle



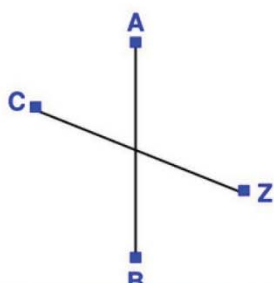
Intersection lines



Perpendicular lines

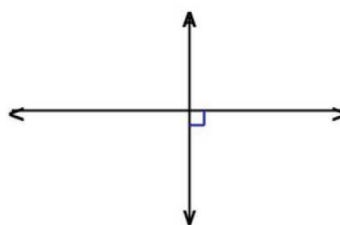
State whether the given pair of lines are parallel, perpendicular, or intersecting.

1)



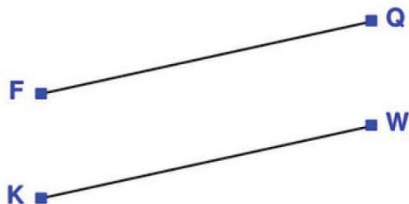
Answer: _____

4)



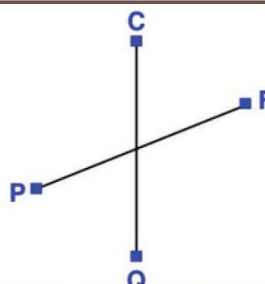
Answer: _____

2)




Answer: _____

5)



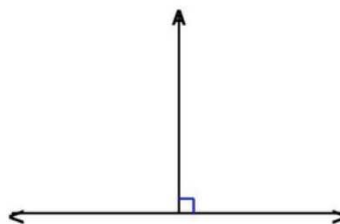
Answer: _____

3)



Answer: _____

6)



Answer: _____