

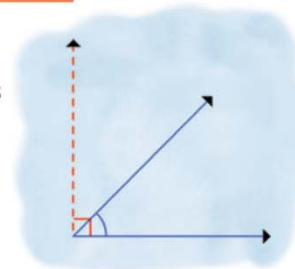
Name :

Class :

Estimating Angle

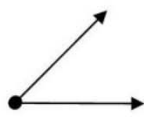


Estimating an angle means trying to guess at the measurement of the angle.



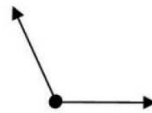
Find estimating of the size of the angles shown.

1)



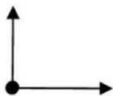
45°

2)



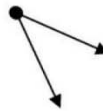
120°

3)



90°

4)



25°

5)



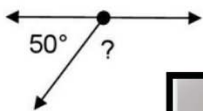
150°

6)



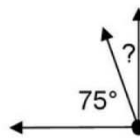
180°

7)



130°

8)



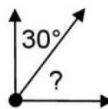
30°

9)



15°

10)



60°