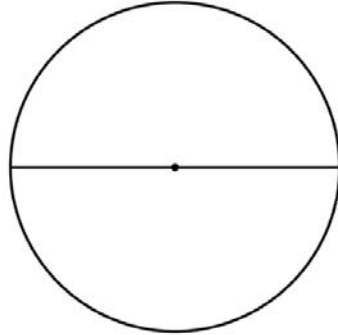


Name \_\_\_\_\_

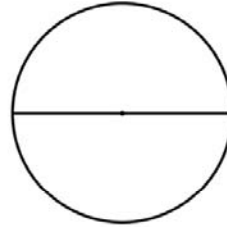
# Radius & Diameter

Measure the radius and diameter using scale.



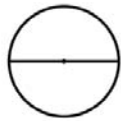
Radius = 3 cm

Diameter = 6 cm



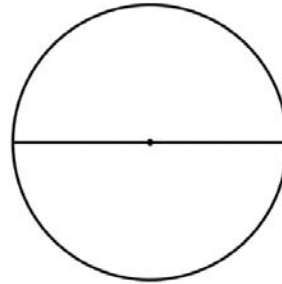
Radius = 2 cm

Diameter = 4 cm



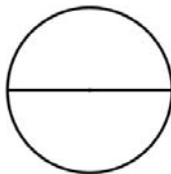
Radius = 1 cm

Diameter = 2 cm



Radius = 2.5 cm

Diameter = 5 cm



Radius = 1.5 cm

Diameter = 3 cm