

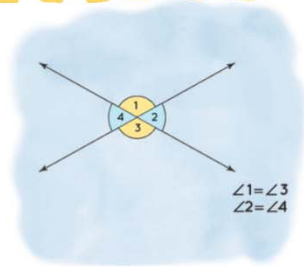
Name :

Class :



Vertical Angles

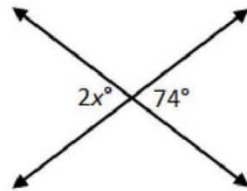
The angles that lie opposite to each other when two lines intersect



Find the values of x and y .

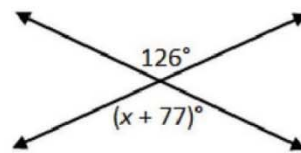
1)

$x =$ _____



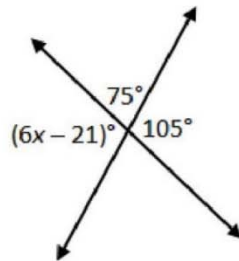
2)

$x =$ _____



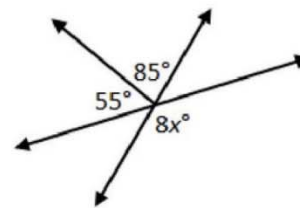
3)

$x =$ _____



4)

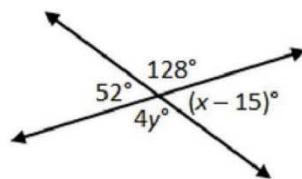
$x =$ _____



5)

$x =$ _____

$y =$ _____



6)

$x =$ _____

$y =$ _____

