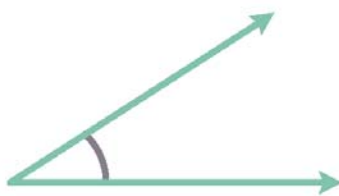


Name: _____

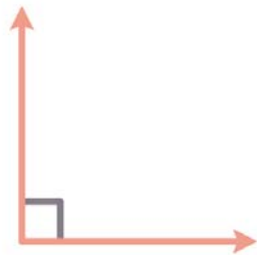
Class: _____

Types of Angles



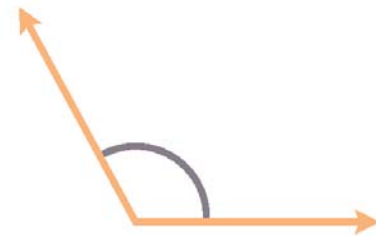
ACUTE ANGLE

Less than 90°



RIGHT ANGLE

Exact 90°




OBTUSE ANGLE

Greater than 90°
but less than 180



STRAIGHT ANGLE

Exact 180°



REFLEX ANGLE

Greater than 180°
but less than 360°



FULL ANGLE

Exact 360°