

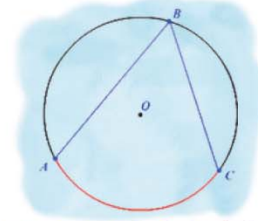
Name :

Class :



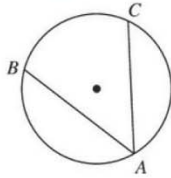
Inscribed Angles

The angle formed in the interior of a circle when two chords intersect on the circle

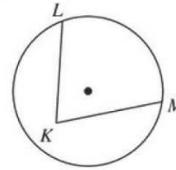


State if each angle is an inscribed angle. If it is, name the angle and the intercepted arc.

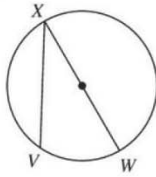
1)



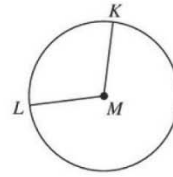
2)



3)

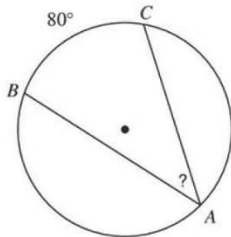


4)

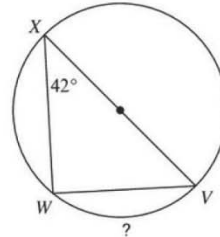


Find the measure of the arc or angle indicated.

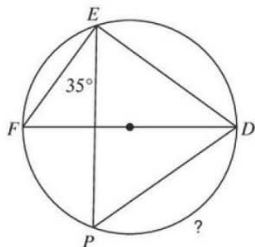
5)



6)



7)



8)

