


ANSWERS

WORKSHEET 7 - TAPE DIAGRAMS

Exercises to Practice Tape Diagrams.

1. On a shelf there are 5 story books, 18 history books and 12 science books. What type of book is there in the smallest quantity and how many fewer are there? Represent the quantities with a tape diagram and compare the lengths.

story books: 





history books: 

science books: 


Answer: Storybooks are the type of book that exists in the smallest quantity.

2. On a table there are 2 apples, 9 oranges and 15 bananas. What fruit is there in the greatest quantity and how many more are there? Represent the quantities with a tape diagram and compare the lengths.

apples: 

oranges: 



bananas: 



Answer: Bananas are the fruit that is found in the greatest quantity.

How Did You Do? 