


ANSWERS


WORKSHEET 6 - TAPE DIAGRAMS

Exercises to Practice Tape Diagrams.

1. In a garden there are 14 red roses, 18 yellow roses and 12 pink roses. Which color of pink is there in the greatest quantity and how many more are there? Represent the quantities with a tape diagram and compare the lengths.

red roses : 

yellow roses : 

pink roses: 




Answer: The color yellow has more pinks.

2. On a school bus, 16 students board at the first stop, 14 students at the second stop, and 10 students at the third stop. At which stop does the greatest number of students pick up and how many more? Represent the quantities with a tape diagram and compare the lengths.

first stop: 

second stop: 

third stop: 



Answer: At the first stop, more students get on.

How Did You Do? 