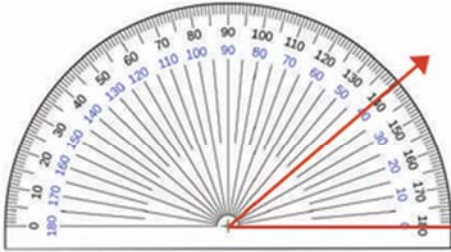


Name _____

Reading a Protractor

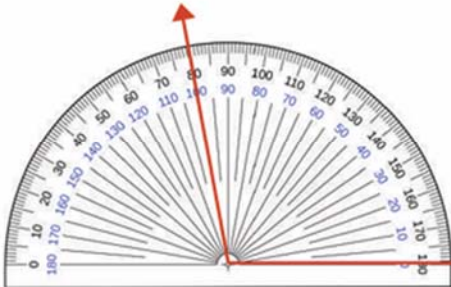
Read the protractor and tick the right option.



(a) 40°

(b) 120°

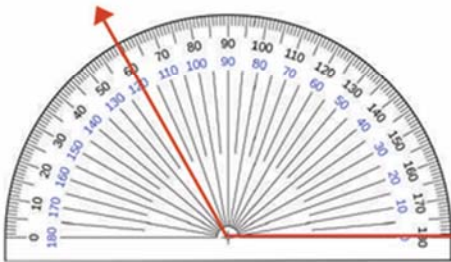
(c) 70°



(a) 80°

(b) 100°

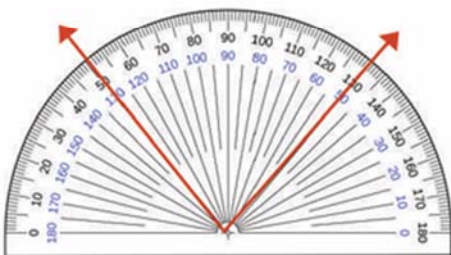
(c) 75°



(a) 40°

(b) 120°

(c) 80°



(a) 20°

(b) 160°

(c) 80°