



NAME: \_\_\_\_\_

## WORKSHEET 5 - TAPE DIAGRAMS

Exercises to Practice Tape Diagrams.

1. At a party there are 15 red candies, 12 orange candies and 8 yellow candies. What color are there more sweets and how many more? Represent the quantities with a tape diagram and compare the lengths.

15 red : 


12 orange : 

8 yellow : 





Answer: \_\_\_\_\_

2. In a zoo there are 10 giraffes, 17 elephants and 8 zebras. What animal is there in the smallest quantity and how many fewer are there? Represent the quantities with a tape diagram and compare the lengths.

giraffes: 

elephants: 

zebras: 



Answer: \_\_\_\_\_

How Did You Do? 