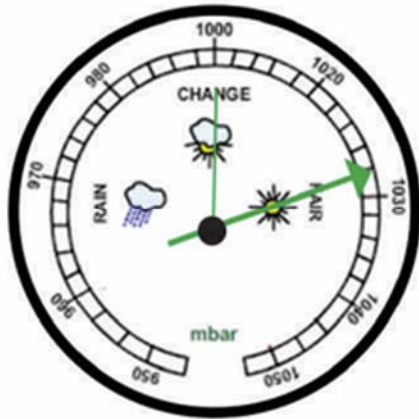


Name \_\_\_\_\_

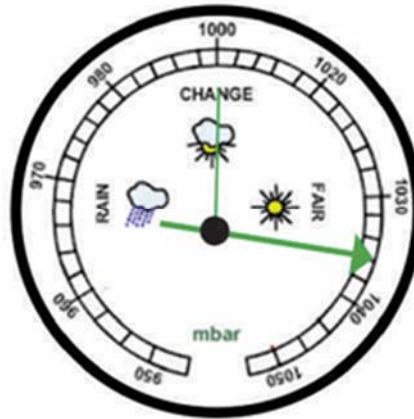
## Reading and Explaining Pressure Changes

What is the pressure change since the hand was set? What type of weather changes do you expect based on this?



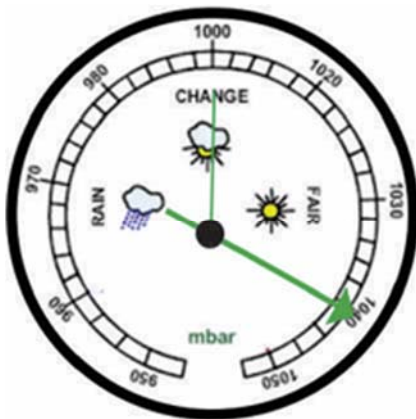
1) Pressure Change: \_\_\_\_\_

The weather will:    Improve  
                            Get Worse  
                            Stay the Same



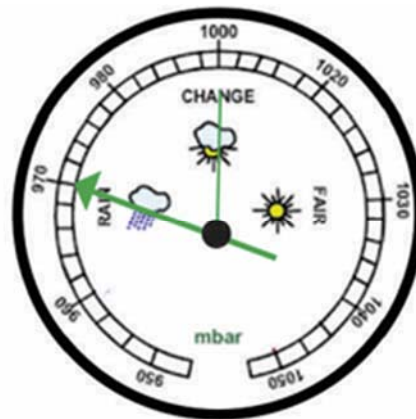
2) Pressure Change: \_\_\_\_\_

The weather will:    Improve  
                            Get Worse  
                            Stay the Same



3) Pressure Change: \_\_\_\_\_

The weather will:    Improve  
                            Get Worse  
                            Stay the Same



4) Pressure Change: \_\_\_\_\_

The weather will:    Improve  
                            Get Worse  
                            Stay the Same