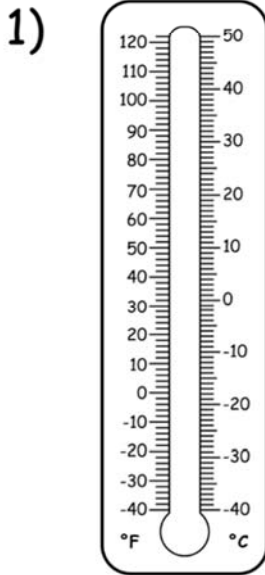



Name _____

Fahrenheit and Celsius


Convert from celsius to fahrenheit and fill Thermometer.




$30^{\circ}\text{C} = \underline{\hspace{2cm}}$




$0^{\circ}\text{C} = \underline{\hspace{2cm}}$




$25^{\circ}\text{C} = \underline{\hspace{2cm}}$



$-10^{\circ}\text{C} = \underline{\hspace{2cm}}$



$10^{\circ}\text{C} = \underline{\hspace{2cm}}$



$-5^{\circ}\text{C} = \underline{\hspace{2cm}}$