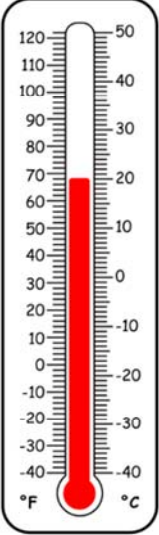
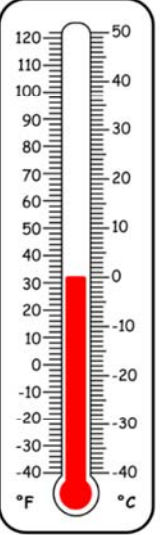
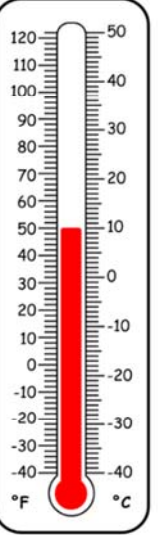
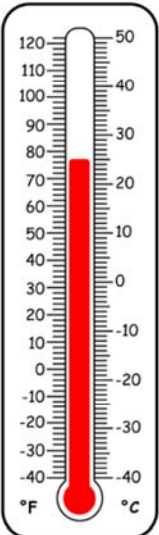
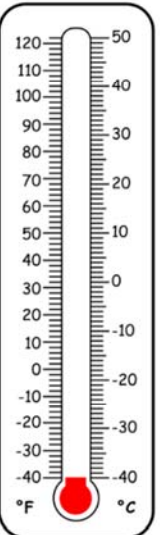
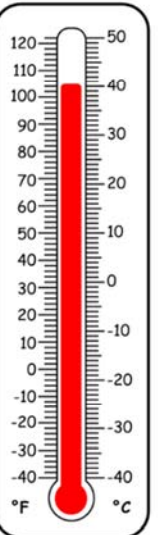


Name _____

Fahrenheit and Celsius

Convert from fahrenheit to celsius and fill Thermometer

1) 	2) 	3) 
$68^{\circ}\text{F} = \underline{20^{\circ}\text{C}}$	$32^{\circ}\text{F} = \underline{0^{\circ}\text{C}}$	$50^{\circ}\text{F} = \underline{10^{\circ}\text{C}}$
4) 	5) 	6) 
$77^{\circ}\text{F} = \underline{25^{\circ}\text{C}}$	$-40^{\circ}\text{F} = \underline{-40^{\circ}\text{C}}$	$104^{\circ}\text{F} = \underline{40^{\circ}\text{C}}$